

KENDRIYA VIDYALAYA NO 2, FCI CAMPUS, GORAKHPUR

BLUE PRINT

SESSION ENDING EXAM 2021-2022

CLASS-III

SUBJECT - EVS

S.No	CHAPTERS/UNIT/TOPIC	OBSERVATION & REPORTING (10M)	IDENTIFICATION & CLASSIFICATION (15M)			DISCOVERY OF FACTS (15 M)			TOTAL 40M
		OBJECTIVE QUESTIONS 1(10)	VSA 1(5)	SA 2(3)	LA 4(1)	VSA 1(5)	SA 2 (3)	LA 4(1)	
1	SHARING OUR FEELING	1(1)	1(1)	-	-	1(1)	-	-	3(3)
2	THE STORY OF FOOD	1(1)	-	-	-	1(1)	-	-	2(2)
3	MAKING POTS	1(1)	1(1)	-	-	-	-	-	2(2)
4	GAMES WE PLAY	1(3)	-	-	-	1(1)	-	-	4(4)
5	HERE COMES A LETTER	1(2)	-	-	-	-	2(1)	-	4(3)
6	A HOUSE LIKE THIS	1(1)	-	-	-	-	-	-	1(1)
7	OUR FRIENDS ANIMALS	-	-	-	-	-	2(1)	-	2(1)
8	DROP BY DROP	-	1(1)	-	4(1)	-	-	-	5(2)
9	FAMILIES CAN BE DIFFERENT	1(1)	1(1)	2(1)	-	1(1)	-	-	5(4)
10	LEFT- RIGHT	-	1(1)	-	-	-	-	-	1(1)
11	A BEAUTIFUL CLOTH	-	-	2(1)	-	1(1)	2(1)	-	5(3)
12	WEB OF LIFE	-	-	2(1)	-	-	-	4(1)	6(2)
	TOTAL	10(10)	5(5)	6(3)	4(1)	5(5)	6(3)	4(1)	40(28)

NOTES :-

VSA- VERY SHORT ANSWER

SA- SHORT ANSWER

LA – LONG ANSWER

KENDRIYA VIDYALAYA NO 2, FCI CAMPUS, GORAKHPUR

SAMPLE PAPER FOR SESSION ENDING EXAMINATION 2021-2022

TIME- 1 HOUR

SUBJECT -EVS

CLASS-III

SECTION ____

NAME - _____

ROLL NO _____

COMPETENCIES	OBSERVATION & REPORTING	IDENTIFICATION & CLASSIFICATION	DISCOVERY OF FACTS	TOTAL
MARKS	10M	15M	15M	40M
MARKS OBTAINED				

OBSERVATION & REPORTING

Objective questions

1. Identify the pictures given below and write their names? (1x5=5)

a)



b)



c)



d)

e)





2. Give two examples for each. (1x5=5)

a) Write the name of any two medicinal plants.

b) Do you play games with your family members ? Which games and with whom?

c) Write some places where you have seen the telephone?

d) What kind of roofs do the houses in Assam have ?

e) Which game do you like the most ?

IDENTIFICATION AND CLASSIFICATION

1. Fill in the blanks using the words given below. (1x5=5)

Plants , cousin , blind , + , clay

a) Ravi Bhaiya was a _____ man.

b) Potter needs water and _____ to make pots.

c) We can give the vegetables washed off water to _____.

d) My Uncle 's son is my _____ brother.

e) _____ is a sign of hospital.

2. Answer the following questions:- (2x3=6)

a) Like us animals also need water to live. There are many other things which are required by both animals and humans. Write the names of three such things.


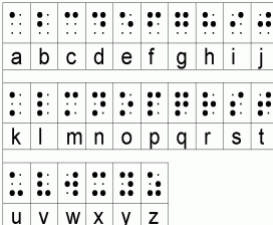



b) Draw some shapes / design/ pattern of clothes you see at your home.

c) In the last one year what are the changes that happened in Sitamma's family?

3. Can you think the ways of saving water? Write any four ways. (4x1=4)

DISCOVERY OF FACTS

1. Observe the pictures and answer all the question given below. (1x5=5)

	Mint leaves are used in (stomachache/toothache)_____
	Blind people read and write through (Braille script/Roman script)_____.
	This t shirt has shapes of _____
	Used to play _____
	This is a _____ (joint / small) family.

2. Answer the following questions:- (2x3=6)

a) Which of the two do you like more writing a letter or making a phone call? Why?


b) Who do these animals eat?

Rat _____ Squirrel _____

c) Who all are there in your family? Write your relation with them?

3. This is a picture with Ruchira in the centre .In this picture, draw (4x1=4)

- i) A book behind Ruchira
- ii) An animal on Ruchira's right.
- iii) A chair on Ruchira's left.
- iv) A tree in front of Ruchira.



Syllabus of Session Ending Exam (2021-22)

Class III

Subject-EVS

1. Sharing Our Feelings
2. The Story of Food
3. Making Pots
4. Games We Play
5. Here comes a Letter
6. A House Like This
7. Our Friends- Animals
8. Drop by Drop
9. Families can be different
10. Left-Right
11. A Beautiful Cloth
12. Web of Life

KENDRIYA VIDYALAYA NO.2 ,FCI GORAKHPUR
BLUE PRINT SESSION ENDING EXAM 2021-22

Class :III

Subject : Hindi

Total Marks-40

Time – 1 hour

Sl No.	Chapter/Lesson/Poem	Total marks	VSA	SA	LA	No. of questions
1	अपठित गद्यांश	5	5(1)	-	-	5
2	(गद्य/ पद्य) से प्रश्न					
	पाठ – 11 मीरा बहन और बाघ	1	1(1)			1
	पाठ - 12 जब मुझको साँप ने काटा	2		1(2)		1
	पाठ –14 सबसे अच्छा पेड़	2		1(2)		1
3	व्याकरण					
	पाठ -10 क्योंजीमल और कैसे कैसलिया (वचन बदलो, लिंग बदलो)	2	2(1)			2
	पाठ -11 मीरा बहन और बाघ (विलोम शब्द , पर्यायवाची)	2	2(1)			2
	पाठ -12 जब मुझे साँप ने काटा (सामान अर्थ वाले शब्द)	2	2(1)			2
	पाठ -13 मिर्च का मज़ा (सामान तुक वाले शब्द , वाक्य बनाओ)	2	2(1)			2
	पाठ - 14 सबसे अच्छा पेड़ (वाक्य बनाओ)	2	2(1)			2

4	सृजनात्मक लेखन (कोई एक)	5			1(5)	1
	अनुच्छेद लेखन					
	चित्र वर्णन					
5	वर्तनी					
	पाठ -10 क्यौंजीमल और कैसे कैसलिया	1	1(1)			1
	पाठ -11 मीरा बहन और बाघ	1	1(1)			1
	पाठ -12 जब मुझे साँप ने काटा	1	1(1)			1
	पाठ -13 मिर्च का मज़ा	1	1(1)			1
	पाठ - 14 सबसे अच्छा पेड़	1	1(1)			1
6	शब्द भंडार					
	पाठ -10 क्यौंजीमल और कैसे कैसलिया	1	1(1)			1
	पाठ -11 मीरा बहन और बाघ	1	1(1)			1
	पाठ -12 जब मुझे साँप ने काटा	1	1(1)			1
	पाठ -13 मिर्च का मज़ा	1	1(1)			1
	पाठ - 14 सबसे अच्छा पेड़	1	1(1)			1
7	सुलेख	5			1(5)	1
	TOTAL	40	26(1)	2(2)	2(5)	30

SYLLABUS FOR SESSION ENDING EXAM 2021-22

CLASS : III

SUBJECT: HINDI

पाठ -10 क्यॉजीमल और कैसे कैसलिया

पाठ -11 मीरा बहन और बाघ

पाठ -12 जब मुझे साँप ने काटा

पाठ -13 मिर्च का मज़ा

पाठ - 14 सबसे अच्छा पेड़



केंद्रीय विद्यालय क्र.2 , एफ.सी.आई., गोरखपुर

आदर्श प्रश्नपत्र (नमूना) सत्रांत परीक्षा सत्र - 2021-22

कक्षा: तीन

विषय :हिंदी

पूर्णांक: 40

समय :1 घंटे

भाग -1 अपठित गद्यांश

नीचे लिखे गद्यांश को पढ़कर प्रश्नों के उत्तर लिखिए -

किसी गाँव में एक सेठ रहता था | उसके यहाँ एक मूर्ख नौकर काम करता था | एक दिन गर्मी के दिन में सेठ थका मांदा घर आया और पलंग पर लेट गया | उसने नौकर से पंखा झलने को कहा | पंखे की हवा से सेठ को नींद आ आ गई| इसी बीच एक मक्खी उड़कर आई और सेठ के मुँह पर बैठ गई |

- 1) गाँव में कौन रहता था ?
- 2) उसके यहाँ कौन काम करता था ?
- 3) सेठ थका मांदा आकर कहाँ लेट गया ?
- 4) सेठ ने नौकर से क्या झलने को कहा ?
- 5) पंखे की हवा से सेठ को क्या आ गई ?

भाग -2 गद्य/ पद्य

प्रश्नों के उत्तर लिखिए -

- 1) मीरा बहन का जन्म कहाँ हुआ था ? (1 अंक)
- 2) तीनों भाई किस मौसम में घर कि तलाश में निकले ? (2 अंक)
- 3) मैं बूढ़े आदमी को क्या बताना चाहता था ? (2 अंक)

भाग -3 व्याकरण

1) वचन बदलो ।

लड़की - _____

2) लिंग बदलो ।

शेर - _____

3) विलोम शब्द (उल्टे अर्थ) लिखो ।

ऊपर - _____

4) पर्यायवाची शब्द लिखो ।

फूल - _____

5) सही शब्द चुनकर खाली स्थान भरो ।

आम _____ होंगे तो आचार बन जायेगा (पक्के/ कच्चे) ।

6) नीचे दिए गए शब्द के वाक्य बनाओ ।

कहानी - _____

7) सामान अर्थ वाले शब्द लिखो ।

मुलाकात - _____

8) सामान तुक वाले शब्द लिखो ।

आना - _____ +

9) समूह से अलग शब्द पर घेरा लगाओ ।

आटा चक्की गेहूँ पालक

10) सही जगह पर अनुस्वार लगाइए ।

बदर

भाग -4 सृजनात्मक लेखन

नीम के पेड़ से क्या - क्या लाभ होते हैं ? उस पर पाँच पंक्तियाँ लिखो ।

अथवा

चित्र और सहायक शब्दों की मदद से पाँच वाक्यों का एक अनुच्छेद लिखिए ।

बगीचा

बच्चे

पतंग

खेल

झूले

गुब्बारे



भाग -5 वर्तनी

1) उल्टा पुल्टा शब्दों को ठीक करके लिखो ।

तपील - _____ रिनायल - _____

2) ठीक शब्द पर गोला लगाओ ।

साइकिल / साईकिल

नारियल / नारीयल

आकाश / आकास

भाग -6 शब्द भण्डार

1) विलोम शब्द ।

मीठा - _____

2) समान तुक वाले शब्द लिखिए ।

पानी - _____

3) लिंग बदलो ।

बाघ - _____

4) वचन बदलो ।

मिठाई - _____

5) निम्नलिखित वाक्यांश के लिए एक शब्द लिखो ।

जिनको पाला जाता है - _____

भाग -7 सुलेख

तीन भाई थे । एक दिन सुबह के समय तीनों नए घरों के तालाश में निकल पड़े । गरम - गरम धूप में वे सड़क पर चलते चले गए । थोड़ी देर में आम का पेड़ आया ।

Syllabus of Session Ending Exam (2021-22) Class III Maths

1. Who is heavier?
2. How Many Times?
3. Play with patterns.
4. Jugs and mugs.
5. Can we share?
6. Smart Charts!
7. Rupees and Paise

BLUE PRINT

SESSION ENDING EXAM 2021-2022

SUBJECT-MATHS

CLASS -III

SN	Name of chapters	VSA(1Marks)	SA(2Marks)	LA(4Marks)	TOTAL	
1.	Who is heavier?	1(1)		4(1)	5(2)	
2.	How many times?	1(1)	4(2)		5(3)	
3.	Play with patterns	3(3)	4(2)		7(5)	
4.	Jugs and mugs	1(1)		4(1)	5(2)	
5.	Can we share?		6(3)		6(3)	
6.	Smart charts			4(1)	4(1)	
7.	Rupees and Paise	2(2)	2(1)	4(1)	8(4)	
	TOTAL	8(8)	16(8)	16(4)	40(20)	

**KENDRIYA VIDYALAYA NO.2 FCI
GORAKHPUR
Session Ending Exam**

Class-III

Subject- Mathematics.

Time:60 minutes. Max.Marks: 40

Concept(20)

Knowledge(10)

VSA 1(2)

(2 x 1=2)

Fill in the blanks

1) 1kg= _____ gm.

2) $6+6+6+6+6=$ _____ $\times 5=$ _____

SA 2 (2)

(2x2=4)

3) How many apples?

Each plate has 8 apples.

So, 5 plates have = _____ \times _____ = _____ apples.

4) Find the secret message.

5 A 5 R 5 E 5 Y 5 O 5 U 5 R 5 E 5 A 5 D 5 I 5 N 5 G ?

Ans) -

?

(5) See following notes and coins and answer the questions given:



(a) Write the total amount of money shown above.

ans) _____ Rs.

(b) Write the amount in words.

(Ans) _____

(c) If you give 200 Rs. from above money to your friend then what amount will be left?

Ans) _____

Understanding(10)

VSA.

(2 x 1=2)

(6) Complete the pattern .

4, 8, 12 ,16, __ , __ , __ , __ .

(7) $350 \text{ ml} + 650 \text{ ml} =$ _____ ml.

SA 2(2).

(2 x 2=4)

(8) Solve using box method.

78×18

(9) Reema has 24 mtrs of rope .She wants to distribute the rope among her 3 children.Each child got = $24 \text{mtrs} \div$ _____ = ____ mtrs.

LA.

(1 x 4=4)

(10) Write name and draw the following.

- (a) Things weighing less than half kg.
(Draw any 2 things)



- (b) Things weighing more than half kg.
(Draw any 2 things)



Ability to compute (10)

VSA.

(2 x 1=2)

Fill in the blanks .

(11) 50 paise + 250 paise = _____ paise.

(12) Find the sum and write whether odd or even.

$$17 + 13 = \underline{\hspace{2cm}} \underline{\hspace{2cm}}.$$

SA. 2(2).

(2 x 2=4)

(13) Arrange the following names according to their alphabetical Order.

Rakesh ,Arpan ,Kavery ,Bobita , Rekha ,Sonia.

1 _____ 2 _____ 3 _____ 4 _____

5 _____ 6 _____

14) How many grains got by each bird ?

Total no. of grains = 12

Total no. of birds =4

So each bird got how many grains ?

Ans-

LA.

(1 x 4=4)

(15) This board shows the number of students absent and present.

Class	Number of students	Students present	Students absent
I	43	40	3
II	44	39	5
III	42	38	4
IV	40	35	5
V	41	33	7
TOTAL			

a) How many children in all are there in the school?

_____ students.

b) How many children in all are present in the school?

_____ students.

c) How many children in all are absent in the school?

_____ students.

d) In which class most students are present?

_____ class

PSA.(10)

VSA.

(2 x 1=2)

(16) Write all even numbers between 10 to 15.

(17) Add:

Rs. 12.50
+ Rs. 13.00

SA

(2 x 2=4)

(18) Hari booked a railway ticket for 60 rupees. He gave a 100 rupee note.

How much money will he get back with the ticket ?

Ans: _____

(19) Rohan went to market and bought 7 note books .The cost of each book is 12 rupees.

What will be total cost of 7 note books?

Ans)

LA

(4 x 1=4)

(20) There are two water tanks on a terrace of a building . Tank A holds 250 litre water and tank B can hold 500 litre water.

a) Which tank can hold more water and how much more it can hold ?

ans-

b) What is the total capacity of both the tanks?

ans-

c) Which tank can hold 350 litre water?

Ans-

Kendriya Vidyalaya No.2 FCI Campus, Gorakhpur Blue Print

Class-III

Subject-English

Session-2021-22

S.No.	Chapter	VSA (Mks/Ques)	SA (Mks/Ques)	LA (Mks/Ques)	Total (Mks/Ques)
1.	Reading (Unseen)	1(5)			5(5)
2.	The story of the road	1(2) G 1(1) Sp			3(3)
3.	Puppy and I	1(2) G			2(2)
4.	Little tiger, Big tiger	1(1) G 1(2) V			3(3)
5.	What's in the mailbox?	1(1) Sp	2(1) P/P		3(2)
6.	My silly sister	1(1) V		5(1) HW	6(2)
7.	Don't tell	1(2) G			2(2)
8.	He is my brother		2(1) P/P	5(1) Cr. Wr.	7(2)
9.	How creatures move	1(1) P/P 1(1) Sp			2(2)
10.	The ship of desert	1(1) V 1(3) G 1(2) Sp 1(1) V			7(7)
		26 (26)	4(2)	10(2)	40 (30)

Abbreviations-

VSA- Very Short Answer, SA- Short Answer, LA- Long Answer

P/P- Prose & Poetry, G- Grammar, Cr. Wr.- Creative Writing, Sp-

Spellings, V- Vocabulary, HW- Hand Writing

KENDRIYA VIDYALAYA NO. 2 FCI CAMPUS, GORAKHPUR

SAMPLE QUESTION PAPER

SESSION ENDING EXAMINATION

SESSION-2021-22

CLASS-III

SUBJECT-ENGLISH

TIME- 1:00 HR (60 MINS)

MM-40

NAME _____ CLASS _____ SECTION _____

ROLL NO. _____ DATE OF EXAM _____

COMPETENCIES	READING	PROSE/ POETRY	GRAMMAR	CREATIVE WRITING	SPELLINGS	HAND WRITING	VOCABULARY	TOTAL
	5	5	10	5	5	5	5	40
Marks Obtained								

READING COMPREHENSION (UNSEEN PASSAGE)

Read the following passage carefully and answer the questions given below-
(1×5=5)

Once, a lion was sleeping in the jungle when a mouse started running up and down his body just for fun. This disturbed the lion's sleep, and he woke up quite angry. He was about to eat the mouse when the mouse desperately requested the lion to set him free. "I promise you, I will be of great help to you someday if you save me." The lion laughed at the mouse's confidence and let him go.

One day, a few hunters came into the forest and took the lion with them. They tied him up against a tree. The lion was struggling to get out and started to whimper. Soon, the mouse walked past and noticed the lion in trouble. Quickly, he ran and gnawed on the ropes to set the lion free. Both of them sped off into the jungle.

Q.No.1 Where was the Lion Sleeping?

Ans. _____

Q.No.2 Who started running up and down ?

Ans. _____

Q.No.3 Who desperately requested the lion to set him free?

Ans. _____

Q.No.4 Who laughed at the mouse's confidence and let him go ?

Ans. _____

Q.No.5 Write the names of two animals from the above paragraph -

Ans. 1- _____ 2- _____

PROSE/POETRY

Answer the following questions in the space given- (5 Marks) Q.No.1 where was the people going? (2 marks)

Ans. _____

Q.No.2 What does the child decide to do ?(2 marks)

Ans. _____

FILL IN THE BLANKS CORRECT ANSWER

Q.No.3 The bird can ____ upon the ground. (1 mark)

Ans. (a) Hop
(b) Swim

GRAMMAR

A) Make two word from one word. One has been done for you.(1x2=2)

Butterfly butter fly
Everywhere _____ _____
Inside _____ _____

B) Fill in the blanks with rhyming words.(1X2=2)

a. Hill _____ _____.
b. Hay _____ _____.

C) Add 'ly' and make new words (1x1=1)

loud _____

D) Write the full form of following words.(1x2=2)

Can't= _____
Isn't= _____

E) Make as many you can from within the given words.

ROARING IN RAN ROAR
FROWNING _____ _____ _____
BLINKING _____ _____ _____
WONDERINGLY _____ _____ _____

CREATIVE WRITING

Write five lines on "My brother" in the space provided- (5 Marks)

- 1) _____
- 2) _____
- 3) _____
- 4) _____
- 5) _____

SPELLINGS

Encircle the correct spellings- (1X5=5)

Story stary

Moilbox Mailbox

Creatures Creotures

Ship shup

Desert dasert

HANDWRITING

Rewrite the following lines in neat and legible handwriting-(5 Marks)

Mother your baby is silly ! she is so very childish!
She dose not know the difference between the light in the streets and the bright stars. when we play with pebbles she thinks they are real food. She even tries to put them into her mouth. When I open a book before her and ask her to learn her a,b,c She tears the pages with her hands and roars with joy at nothing. This is your baby's way of doing her lessons!

VOCABULARY

a) Give the rhyming word for the following words-

RUN _____

b) Rearrange the letters and make correct word-

SEMOU- _____


RESOH- _____

c) Write the similar words from the story "my silly sister"

FOOLISH _____

d) Complete the sentence-

I am the ship of _____.



Kendriya Vidyalaya No.2 FCI Campus, GorakhpurSyllabus for

SE Exams

Class-III

Subject-English

Session-2021-22

S.No.	Names of the Chapters	Descriptions
1.	Reading (Unseen)	One Unseen Passage
2.	The story of the road	Story
3.	Puppy and I	Poem
4.	Little tiger, Big tiger	Story
5.	What's in the mailbox ?	Poem
6.	My silly sister	Story
7.	Don't tell	Poem
8.	He is my brother	Story
9.	How creatures move	Poem
10.	The ship of desert	Story